



NAME _____ DATE _____

CAMPARING THE NUMBERS


Count the objects and fill in the number bond and place value chart. Complete the sentences to add the tens and ones.

1)  $7 \times 10 = 70$

 $1 \times 1 = 1$

$70 + 1 = \underline{\hspace{2cm}}$.

How much 71 is more than 70 ? Ans: .

2)  $5 \times 10 = 50$


 $9 \times 1 = 9$

$50 + 9 = \underline{\hspace{2cm}}$.

How much 59 is more than 50 ? Ans: .


Tens	Ones

3)  $8 \times 10 = 80$

 $2 \times 1 = 2$

$80 + 2 = \underline{\hspace{2cm}}$.

How much 82 is more than 80 ? Ans: .

4)  $6 \times 10 = 60$

$60 + 0 = \underline{\hspace{2cm}}$.

How much 60 is more than 60 ? Ans: .

Tens	Ones